

1 Complete the number tracks.

0	1	2						
---	---	---	--	--	--	--	--	--

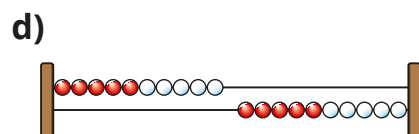

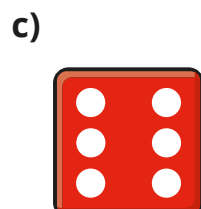
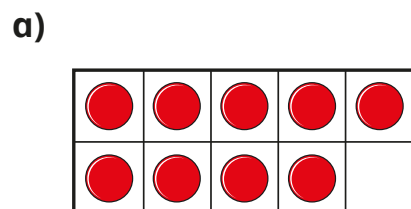
12	13	14						
----	----	----	--	--	--	--	--	--

	10	11			14	
--	----	----	--	--	----	--

			14	15			18		
--	--	--	----	----	--	--	----	--	--

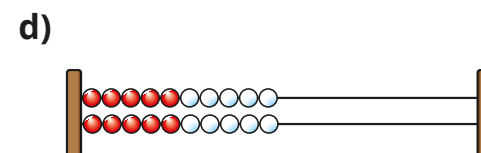
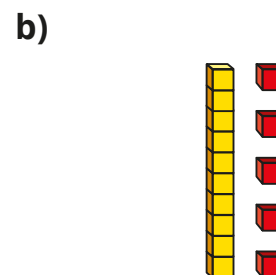
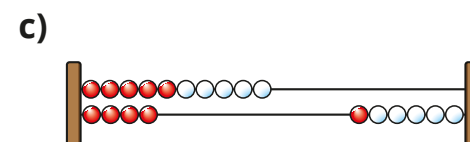
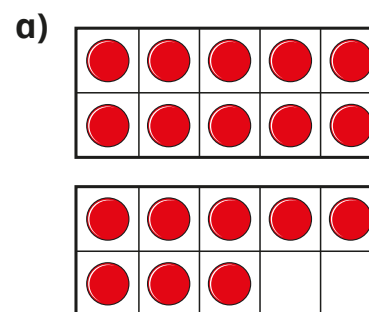
five	six			
------	-----	--	--	--

2 What numbers are shown? Give your answers in numerals and words.



3 What numbers are shown?

Give your answers in numerals and words.

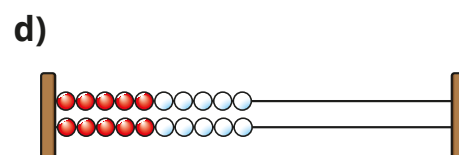
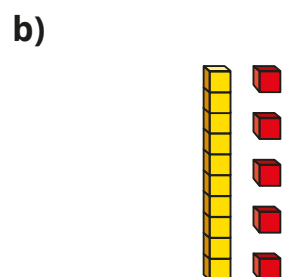
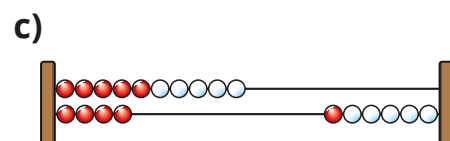
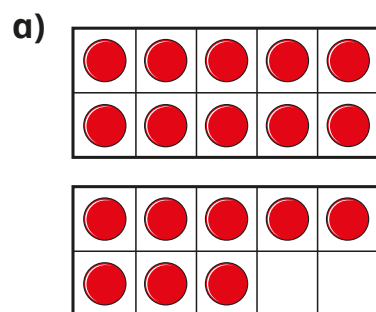


4 Make each number in three different ways.

11	ten	nineteen	20
----	-----	----------	----

Compare answers with a partner.

- 3** What numbers are shown?
Give your answers in numerals and words.



- 4** Make each number in three different ways.

11	ten	nineteen	20
----	-----	----------	----

Compare answers with a partner.


- 5** Mo uses counters and ten frames to make a number.




I have 1 full ten frame. There are 2 counters on the other ten frame.

What is Mo's number?

- 6** Tiny uses base 10 to make a number.



I have made the number two.



What mistake has Tiny made?

What is Tiny's number?